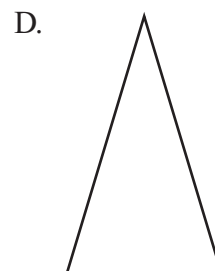
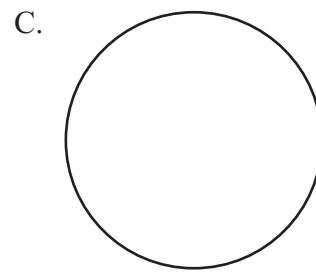

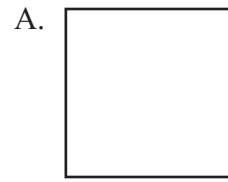
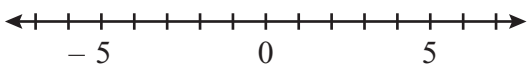


- 5 Which of the following shapes appears to have **exactly** two lines of symmetry?



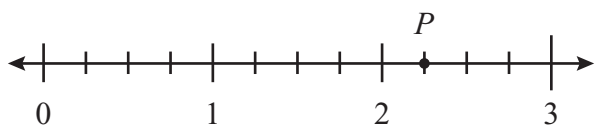
- 6 What is the distance between -2 and 2 on the number line shown below?



- A. 0 units
 - B. 3 units
 - C. 4 units
 - D. 5 units
- 7 What is the value of the 2 in the number below?

54.625

- A. two hundred
 - B. twenty
 - C. two tenths
 - D. two hundredths
- 8 Which of the following best represents the location of point P on the number line below?



- A. 2.5
- B. 2.33
- C. 2.25
- D. 2.1