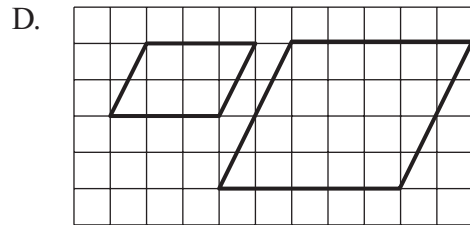
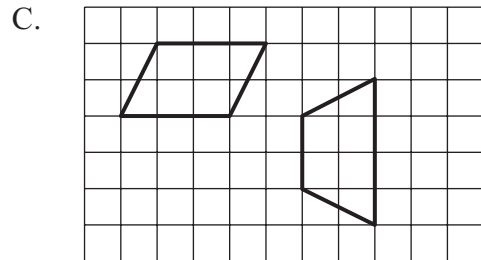
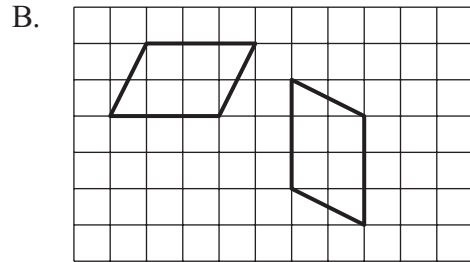
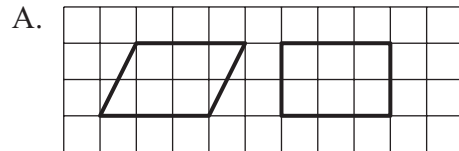


Mark your answers to multiple-choice questions 32 through 39 in the spaces provided in your Student Answer Booklet. Do not write your answers in this test booklet. You may do your figuring in the test booklet.

- 33 What is the total number of factors of 12?
- A. 4
 - B. 6
 - C. 8
 - D. 12

- 34 Which of the following pairs of quadrilaterals appears to be congruent?

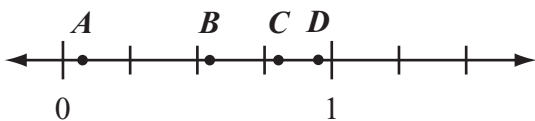


- 35 A bookstore had 3,200 copies of a new book. Every copy was sold for \$16 per copy.

What was the total amount of the bookstore’s sales from this book?

- A. \$22,400
- B. \$32,000
- C. \$50,200
- D. \$51,200

- 36 Which point on the number line below best represents 0.8?



- A. point *A*
- B. point *B*
- C. point *C*
- D. point *D*