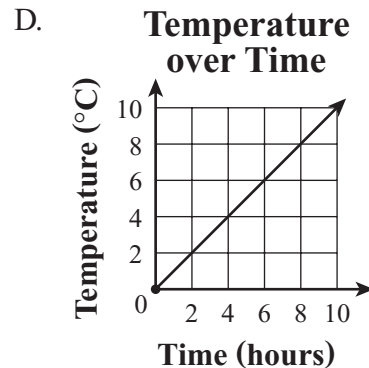
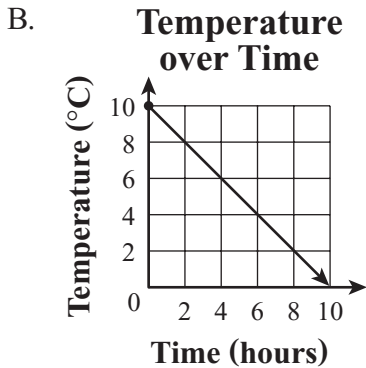
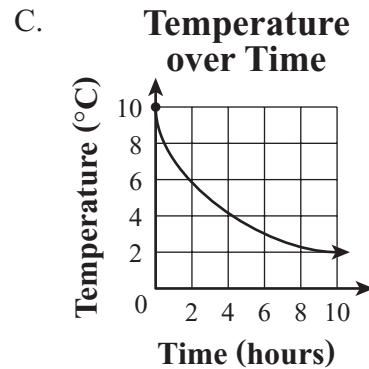
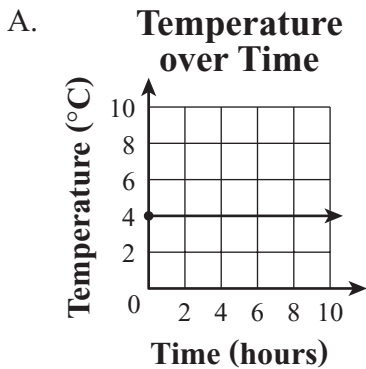


21 Which of the following graphs shows temperature increasing over time?



22 Kyra will toss a number cube that has faces numbered 1 through 6. What is the probability that the cube will land with an even number showing on the top face?

- A. $\frac{1}{6}$
- B. $\frac{1}{5}$
- C. $\frac{1}{3}$
- D. $\frac{1}{2}$

23 Which of the following fractions is equivalent to $1\frac{1}{2}$?

- A. $\frac{8}{4}$
- B. $\frac{6}{4}$
- C. $\frac{5}{4}$
- D. $\frac{3}{4}$

- 24 Carrie is decorating her room using a pattern of shapes. The picture below shows her pattern repeated three times.



If the pattern continues, what will be the 75th shape in the pattern?

- A. 
- B. 
- C. 
- D. 