

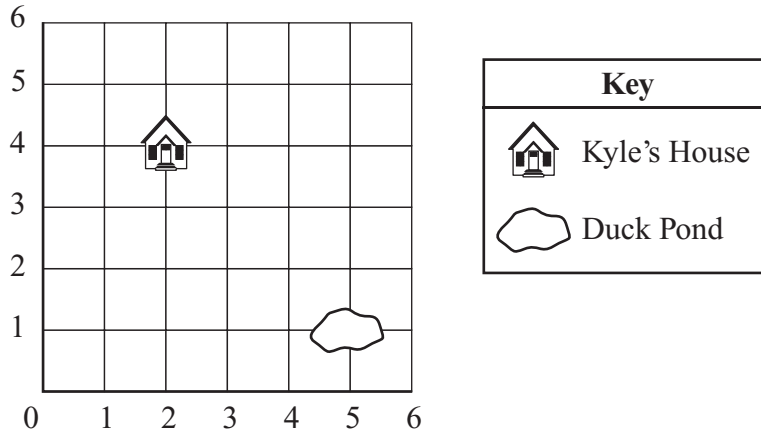
- 21 Graham's sunflower is 2 feet tall. Katie's sunflower is 1 foot 8 inches tall.

How many inches taller is Graham's sunflower than Katie's sunflower?

- Ⓐ 4 inches
- Ⓑ 6 inches
- Ⓒ 16 inches
- Ⓓ 20 inches

Question 22 is a short-answer question. Write your answer to this question in the Answer Box provided.

- 22 The ordered pair (5, 1) shows where the duck pond is on the grid below.



In the Answer Box below, write the ordered pair that shows where Kyle's house is.

Answer Box

22

Write your answer to open-response question 23 in the space provided.




- 23 Ms. Jones had 18 pencils. She gave her pencils to 6 students. She gave the same number of pencils to each student.


How many pencils did Ms. Jones give to each student? Show your work or explain how you got your answer.

Mark your choices for multiple-choice questions 24 through 28 by filling in the circle next to the best answer.

- 24 The pictograph below shows the number of each kind of butterfly caught by the students in Ms. Gray’s class.

Butterflies Caught by Ms. Gray’s Class

Kind of Butterfly	Number of Butterflies
Monarch Butterfly	
Swallowtail Butterfly	
Buckeye Butterfly	

Key
 stands for 3 butterflies

How many butterflies did the students catch in all?

- (A) 8
- (B) 11
- (C) 16
- (D) 24