

Mathematics

SESSION 2

You may use your tool kit and MCAS ruler during this session.

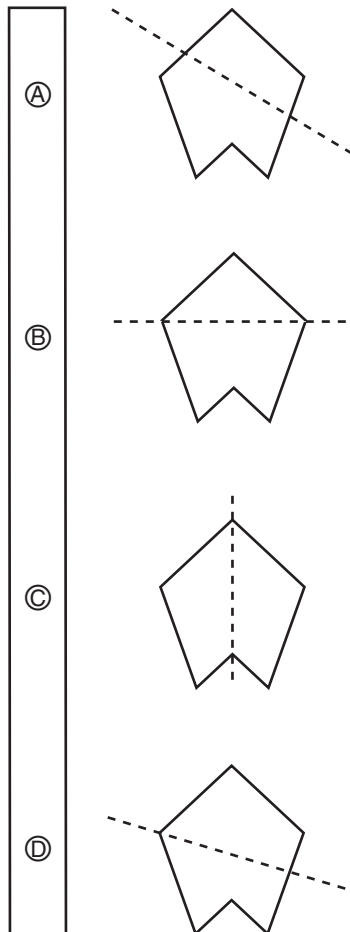
You may **not** use a calculator during this session.



DIRECTIONS

This session contains thirteen multiple-choice questions, three short-answer questions, and three open-response questions. For multiple-choice questions, mark your answers by filling in the circle next to the best answer. For the short-answer and open-response questions, write your answer in the space provided below the question.

- 17 Which shape is shown with its line of symmetry?



- 18 The clocks below show Alex's bedtime and his older sister Patty's bedtime.

Alex's Bedtime



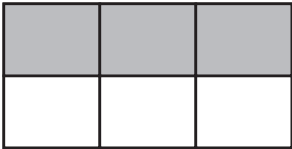



Patty's Bedtime



How much earlier is Alex's bedtime than Patty's bedtime?

- (A) 25 minutes
- (B) 30 minutes
- (C) 45 minutes
- (D) 60 minutes

19 Which rectangle is $\frac{1}{3}$ shaded?

(A)	
(B)	
(C)	
(D)	

20 Two thousand, three hundred five people live in the town of York.

Which of these is another way to write two thousand, three hundred five?

- | | |
|-----|------------|
| (A) | 2,035 |
| (B) | 2,305 |
| (C) | 2,000,305 |
| (D) | 20,003,005 |