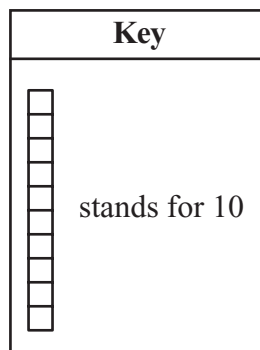
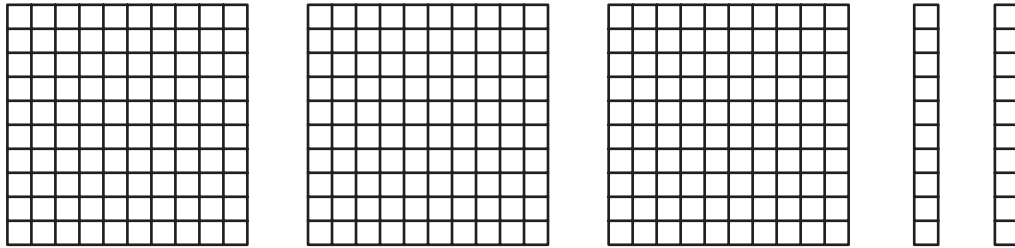


Question 13 is a short-answer question. Write your answer to this question in the Answer Box provided.

13 The picture below shows a number.



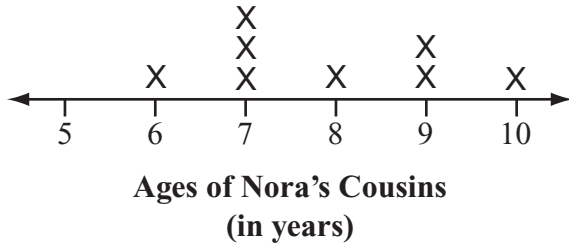
What is the number shown by the picture? Put your answer in the Answer Box below.

Answer Box

13

Mark your choices for multiple-choice questions 14 and 15 by filling in the circle next to the best answer.

- 14 Nora made the line plot below to show the ages, in years, of all her cousins.



How old is Nora's **youngest** cousin?

- (A) 5 years
- (B) 6 years
- (C) 7 years
- (D) 8 years

- 15 Ms. White wrote the problem shown in the box below.

- Rosa and Sanjay have 14 pens altogether.
- Rosa has 6 pens.
- Sanjay has \square pens.

How many pens does Sanjay have?

Which number sentence matches the problem?

- (A) $\square + 14 = 6$
- (B) $\square - 14 = 6$
- (C) $6 + \square = 14$
- (D) $6 - \square = 14$

Question 16 is an open-response question.

16 Some of the shapes shown below are quadrilaterals. Draw an X on **each** shape that is a quadrilateral.

