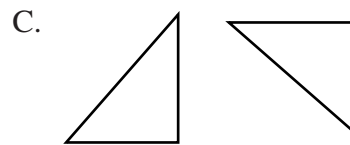
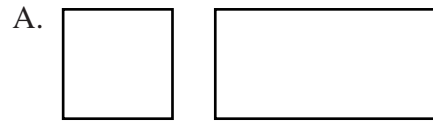


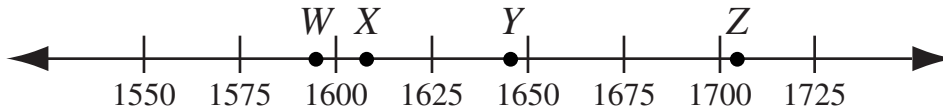
21 Which of the following is read "five-tenths"?

- A. 0.05
- B. 0.5
- C. 5.10
- D. 5.0

22 Which of the following appears to be a pair of congruent shapes?



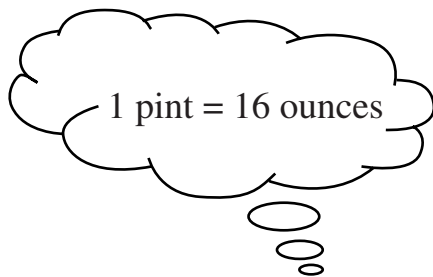
- 23 The points on the timeline below represent four important dates in history.



Which point on the timeline **best** represents the location of 1609?

- A. W
- B. X
- C. Y
- D. Z

-
- 24 Maurice drinks four 8-ounce glasses of milk every day. How many pints of milk does he drink each day?



- A. 2 pints
- B. 4 pints
- C. 16 pints
- D. 32 pints